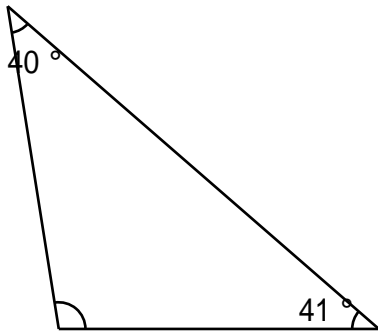


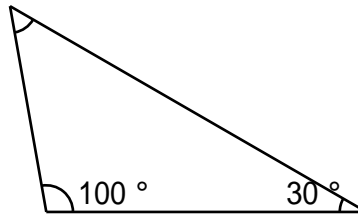
三角形の角

なまえ

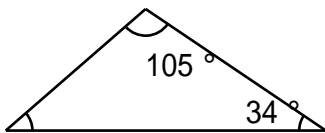
内角の和の性質を使って、三角形の から の角度を求めましょう



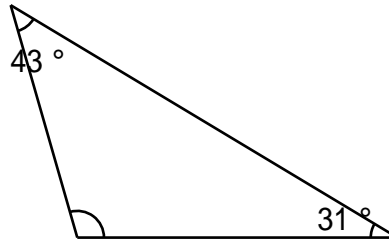
答え



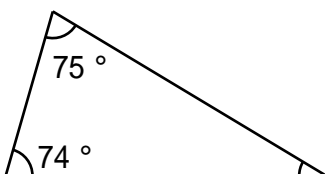
答え



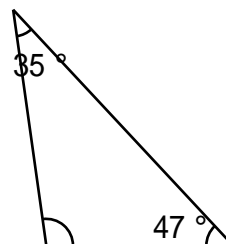
答え



答え



答え



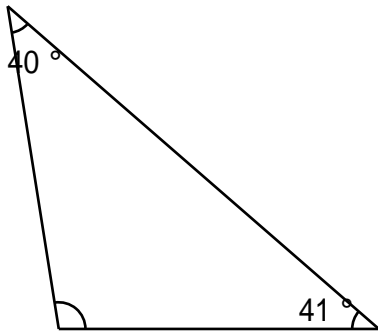
答え

(1)

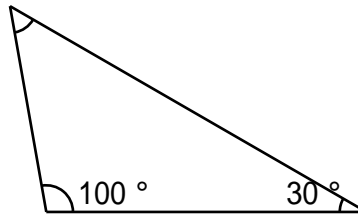
三角形の角

なまえ

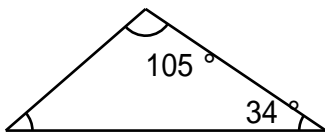
内角の和の性質を使って、三角形の から の角度を求めましょう



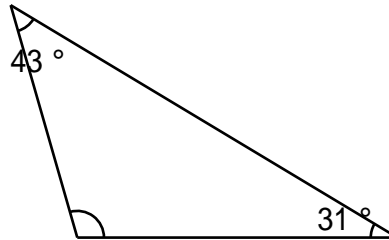
答え 99°



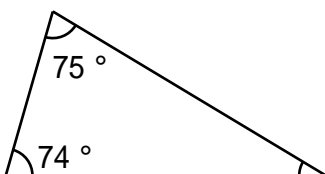
答え 50°



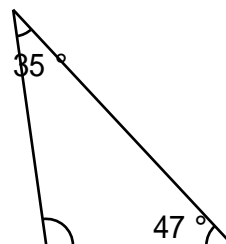
答え 41°



答え 106°



答え 31°



答え 98°

(1)